



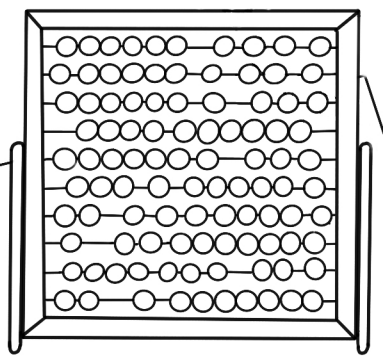

3
2 = 8
6 +

Werkboekje

Rekenen met Kiki & Coco

Groep 2

2026




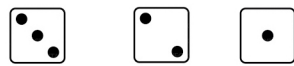
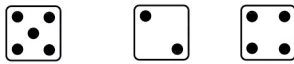
Dobbelstenen



Hoeveel stippen tel je?



Kleur de dobbelsteen met de meeste stippen



Hoeveel zijn 2 dobbelstenen samen?


$$\begin{array}{|c|} \hline \cdot \\ \hline \cdot \\ \hline \cdot \\ \hline \end{array} + \begin{array}{|c|} \hline \cdot \\ \hline \\ \hline \cdot \\ \hline \end{array} =$$

$$\begin{array}{|c|} \hline \cdot \\ \hline \cdot \\ \hline \cdot \\ \hline \cdot \\ \hline \end{array} + \begin{array}{|c|} \hline \\ \hline \cdot \\ \hline \\ \hline \\ \hline \end{array} =$$

Vingers tellen




Hoeveel vingers tel je?



Hoeveel vingers zijn er samen?



+



=



+



=




+



=

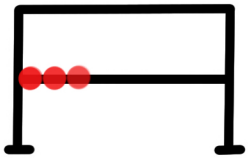
Wat hoort bij elkaar?

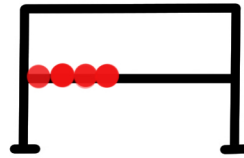


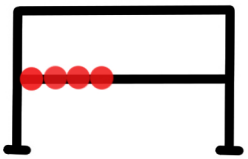
Telraam

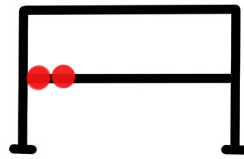


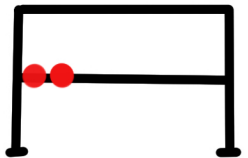
Hoeveel kralen tel je?

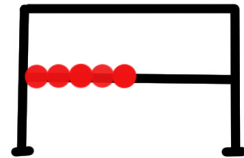


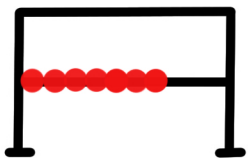


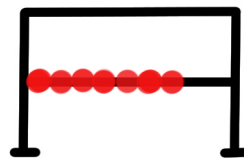




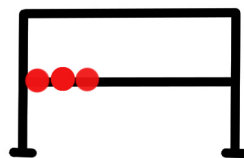


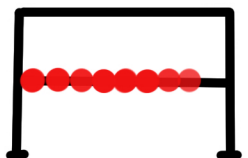















Sommetjes



$2 + 5 =$

$3 + 1 =$

$2 + 2 =$

$4 + 1 =$

$5 + 2 =$

$3 + 3 =$

$1 + 1 =$

$2 + 4 =$

$3 + 3 =$